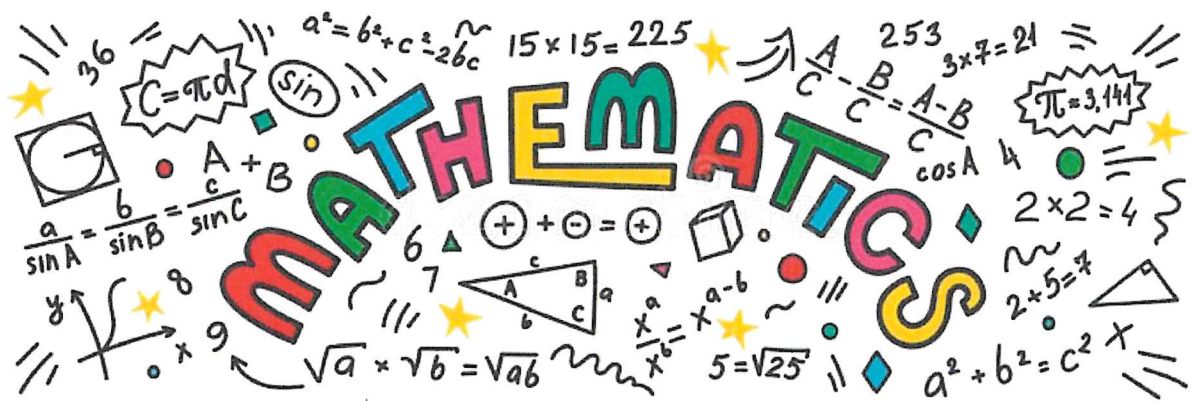


# Maths

## Level Three

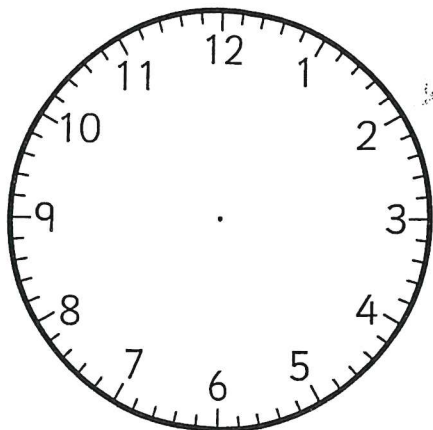
### Task Six



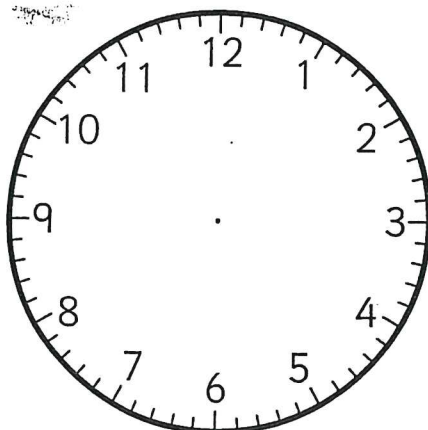
# Clocks - Digital to Analogue 1(6)

NNS (Y2) Read the time to the half or quarter hour on a 12-hour digital clock

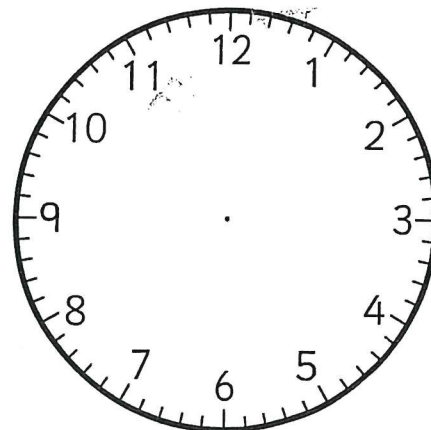
Name \_\_\_\_\_



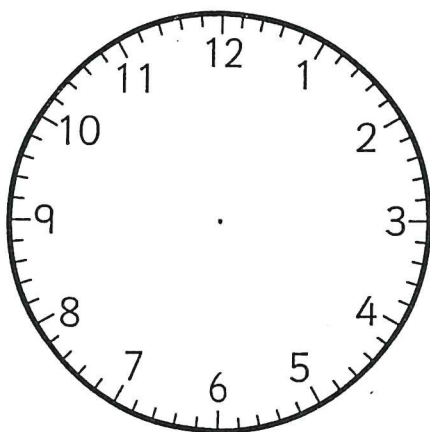
6:45



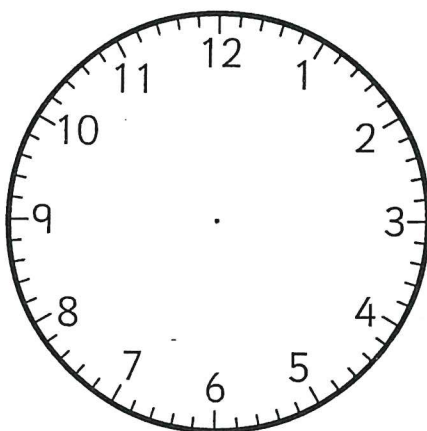
6:45



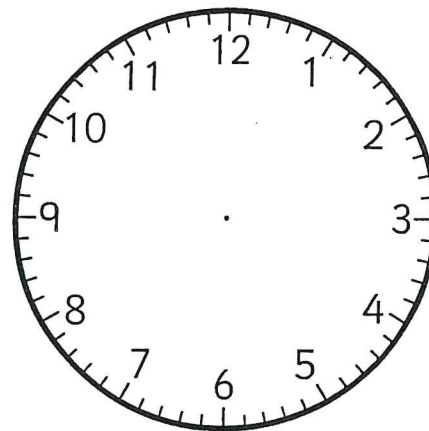
4:45



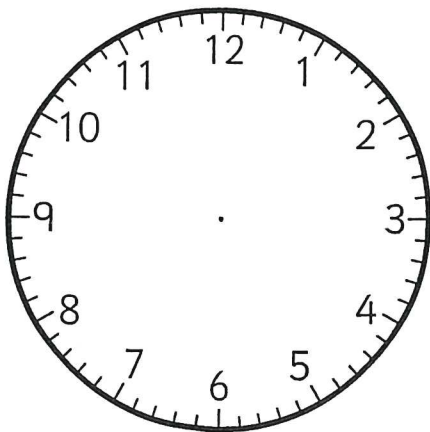
9:45



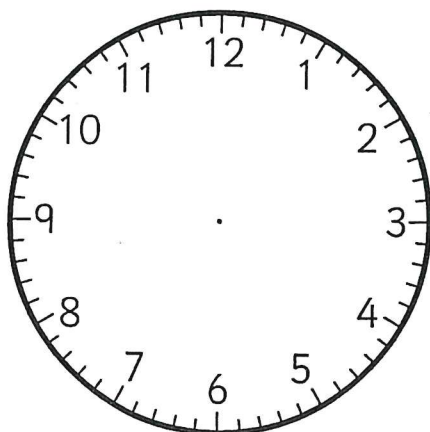
3:15



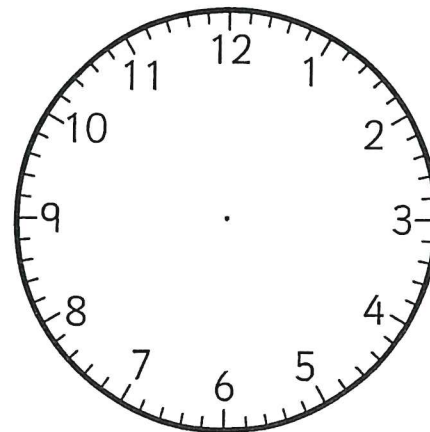
11:15



8:45



7:30



4:15

# A Day Out

I can calculate the duration of events.

- 1) Angelina and her family went for a day out at the zoo. Here is their timetable for the day. Calculate the time taken for each event and fill in the column in the table.

Start time	End time	Event	Time taken
8:25 a.m.	10:20 a.m.	journey to the zoo	
10:20 a.m.	11:32 a.m.	looking at the animals	
11:32 a.m.	12:05 p.m.	elephant talk	
12:05 p.m.	1:53 p.m.	lunch	
1:53 p.m.	2:40 p.m.	visiting the petting zoo	
2:40 p.m.	3:17 p.m.	gift shopping	
3:17 p.m.	3:50 p.m.	feeding the penguins	
3:50 p.m.	5:12 p.m.	journey back home	

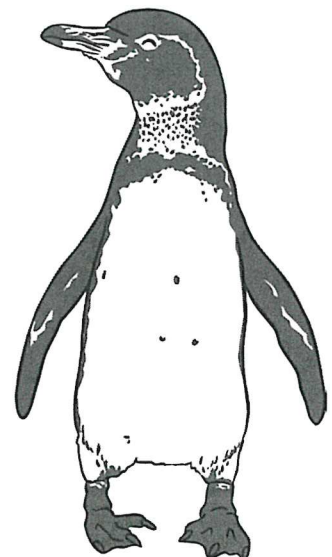
- 2) Calculate how long these combinations of events lasted. Show your working out.

a) Elephant talk and lunch.

\_\_\_\_\_

b) Gift shopping and feeding the penguins.

\_\_\_\_\_





c) Looking at the animals and the elephant talk.

\_\_\_\_\_

d) Travelling to the zoo and travelling home.


\_\_\_\_\_

3) What was the total duration of the whole day out?

\_\_\_\_\_

4) Which lasted longer:  
looking at the animals and the elephant talk or visiting the petting zoo and  
gift shopping?

\_\_\_\_\_



# Converting Time Worksheet



Name: ..... Date: .....

Time in words	24 - hour clock	12 - hour clock	Analogue
Seven o'clock in the morning	07:00h	07:00am	
Eleven o'clock in the morning		11:00am	
Midday		12:00pm	
Midnight			
	13:00h		
	15:00h		
Half past seven in the afternoon		7:30pm	
Half past four in the afternoon			

# English

## Level Three

### Task Six




# Jamaica

Below is an extract from a travel brochure about holidays on the island of Jamaica.

Jamaica is a tropical paradise, an island of colour and warmth lying in the shimmering blue waters of the Caribbean. The spectacular Blue Mountains are ringed with lush forests, magical plantations and incredible beaches. Palm trees sway in the warm breeze and luxurious hotels stand side by side with cosy, thatched self-catering apartments in welcoming resorts.

A holiday on the beautiful island of Jamaica offers something for everyone. If you enjoy an activity holiday, there are plenty of sports on offer, including paragliding, scuba diving, water-skiing and golf, to name but a few. If that is too energetic for you, then just relax in the warmth of the Caribbean sun and enjoy the beautiful surroundings.



### Transport

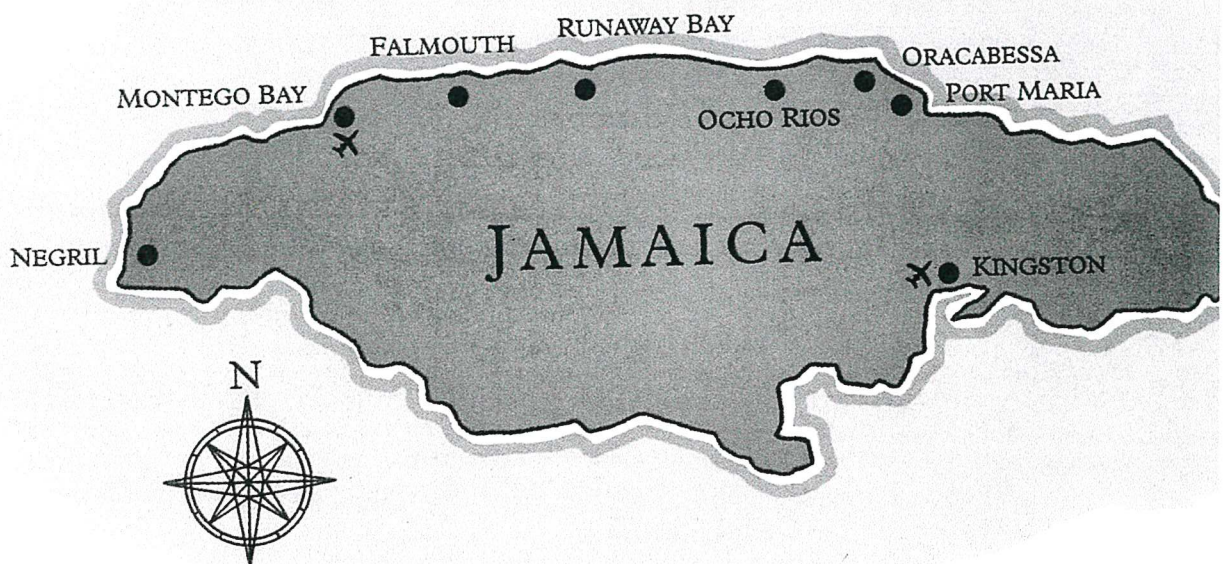
The local taxis are reasonably cheap and are a good, safe way of getting about. Expect to pay about £15 for an 8 km journey.

### Eating out

You will find no shortage of places to eat. Jamaica offers a range of excellent international cuisine, but do sample some of the delicious Caribbean food on offer, such as specialities like conch (a large shellfish).




<b>Capital:</b>	Kingston
<b>Population:</b>	2.4 million
<b>Size:</b>	6,790 square kilometres
<b>Currency:</b>	Jamaican \$
<b>Climate:</b>	Average temperature 84° F Tropical thunderstorms in May & October
<b>Health:</b>	No vaccinations are necessary for tourists
<b>Time difference:</b>	5 hours behind Britain

Old Plantation House



## OCHO RIOS

One of Jamaica's top resorts is Ocho Rios. Its crescent-shaped, sandy beaches are lapped by clear, turquoise seas and backed by lush green mountains. It is ideally situated for visits to the Shaw Park Botanical Gardens and the spectacular Dunn's River Falls – a cool waterfall tumbling over a natural stone stairway. Ocho Rios is a small holiday town with a friendly, relaxed atmosphere, ideal for family holidays.



### PALMS HOTEL


	Prices in £ per person for 14 nights		
	Hotel room		
Number of people	4	3	2
1–19 May	629	659	729
20 May–2 June	649	679	749
3–23 June	659	689	759
24 June–7 July	689	719	789
8–21 July	699	739	809
22–28 July	769	799	869
29 July–18 August	799	829	899
19 August–1 September	759	789	859
2–15 September	699	729	799
16–29 September	679	699	779
30 Sept–20 October	659	679	759
21–31 October	669	689	769
1–8 November	599	639	699
9–24 November	579	619	679
25 Nov–4 December	569	599	659



## MONTEGO BAY

Montego Bay is Jamaica's second city and main tourist resort. It is a busy, lively place, ideal for those looking for a fun-packed, entertaining holiday. Attractions include rafting trips on the *Martha Brae* and the famous Doctor's Cave Beach.

MONTEGO GRAND HOTEL						
	Prices in £ per person for 14 nights					
	Hotel room			Self-catering apartment		
Number of people	4	3	2	4	3	2
1-19 May	639	669	759	649	699	799
20 May-2 June	659	689	789	669	719	829
3-23 June	659	689	789	679	729	839
24 June-7 July	689	739	829	719	779	879
8-21 July	699	749	839	729	789	889
22-28 July	749	779	899	789	829	959
29 July-18 August	779	829	929	819	879	989
19 August-1 September	749	779	889	779	819	939
2-15 September	699	749	839	729	789	889
16-29 September	679	729	819	709	769	863
30 Sept-20 October	659	689	789	679	729	839
21-31 October	659	689	789	679	729	839
1-8 November	629	659	749	649	689	799
9-24 November	599	639	729	629	669	769
25 Nov-4 December	579	619	699	599	649	749



### Comprehension

- A**
- 1 Where is Jamaica?
  - 2 What sort of scenery would you expect to find in Jamaica?
  - 3 What is the average temperature?
  - 4 In which months are there likely to be tropical thunderstorms?
  - 5 Which resort is situated near the Dunn's River Falls?
- B**
- 1 Make a list of all the activities and places to visit that the travel brochure mentions.
- C**
- 1 The material in the travel brochure is presented in several different ways. Describe the various ways in which the information is presented and suggest reasons for using each type of presentation.
  - 2 Write a paragraph to explain whether this travel brochure would persuade you to go to Jamaica on holiday. Give reasons for your answer.