


# Maths

## Level Two

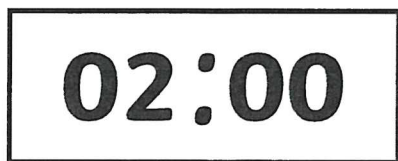
### Task Five




# Digital Time – O’Clock

What is the time?

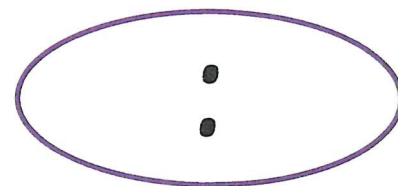
Write digits in the clocks to show the time. The first one has been done for you.




2 o'clock




5 o'clock



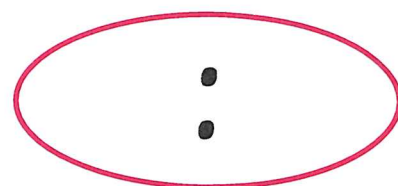
10 o'clock




8 o'clock




12 o'clock



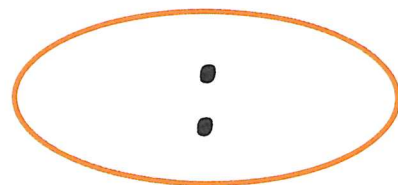
3 o'clock



9 o'clock




7 o'clock



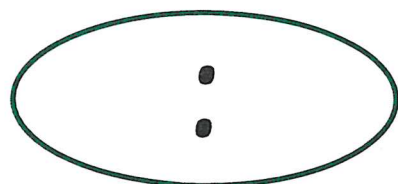
1 o'clock



4 o'clock



11 o'clock



6 o'clock



# The Calendar

I can say how many days there are in months, a year and a leap year.



1) How many days are there in a year which isn't a leap year?

\_\_\_\_\_ days

2) How many days are there in a leap year?

\_\_\_\_\_ days

3) How many days are there in each month?

	Number of days
January	
February	
March	
April	
May	
June	
July	
August	
September	
October	
November	
December	

30 days  
has September,  
April, June and November,  
All the rest have 31,  
Excepting February alone.  
Which has 28 days clear,  
And 29 in each  
leap year.





4) Use the 2020 Calendar to answer these questions:

a) Which have more days in total: March and April or July and August?

---

b) What day is 6<sup>th</sup> November?

---

c) Is 2020 a leap year? How do you know?

---

d) Which months have five Mondays in them?

---

e) Which Months have five Saturdays and five Sundays?

---


f) Henry's birthday is 2<sup>nd</sup> October. Today is 10<sup>th</sup> September. How many days is it until his birthday?

Hint: don't count today's date but do count the day of his birthday.


---

# Tell the Time: Drawing the Time


Draw the time on each clock that is **1 hour before** the given time.



4 o'clock




half past 1




10 o'clock


Draw the time on each clock that is **1 hour after** the given time.



9 o'clock




half past 2




half past 11


Draw the time on each clock that is **2 hours before** the given time.



3 o'clock




half past 12




6 o'clock


Draw the time on each clock that is **2 hours after** the given time.



half past 7




half past 5




8 o'clock

# Tell the Time: Writing the Time


Write the time that is **1 hour before** the time on each clock.



\_\_\_\_\_




\_\_\_\_\_




\_\_\_\_\_


Write the time that is **1 hour after** the time on each clock.



\_\_\_\_\_




\_\_\_\_\_




\_\_\_\_\_


Write the time that is **2 hours before** the time on each clock.



\_\_\_\_\_




\_\_\_\_\_




\_\_\_\_\_


Write the time that is **2 hours after** the time on each clock.



\_\_\_\_\_



\_\_\_\_\_




\_\_\_\_\_

# English

## Level Two

### Task Five



UNIT  
4

## What Does My Heart Do



Your heart is a very special muscle which keeps blood moving around your body. If you put your hand on your chest near your heart, you'll feel it beating. Each time it beats, it pumps blood out around your body.

heart

To hear a heart beating, find somewhere quiet and rest your ear against a friend's chest. You should hear two sounds close together – 'lub-dub', 'lub-dub', 'lub-dub'.

### How big is my heart?

Our hearts grow with us – they get bigger as we do.

Whatever size you are now, your heart will be a bit bigger than your fist.



TV Write

*I Wonder Why My Tummy Rumbles, Brigid Avison*



Copy and complete the sentences.

1 The heart is a \_\_\_\_\_.

bone      muscle

2 The heart pumps \_\_\_\_\_ around your body.

water      blood

3 The heart makes \_\_\_\_\_ sounds close together.

two      four

4 Your heart is a bit \_\_\_\_\_ than your fist.

bigger      smaller

5 A **glossary** is a list of special words and their explanations.

It is written in alphabetical order.

a b c d e f g h i j k l m n o p q r s t u v w x y z

**heart** a muscle that pumps blood around a body

a Choose five words from the page that could go in a glossary.

b Write the words you have chosen in alphabetical order.

6 List two facts that you think people may not know about the heart.

7 Choose a part of your body.

Find out about it.

You could:

- look in books
- look on a computer
- ask friends and adults questions

Draw the body part and write about what you have found out.

**Write**