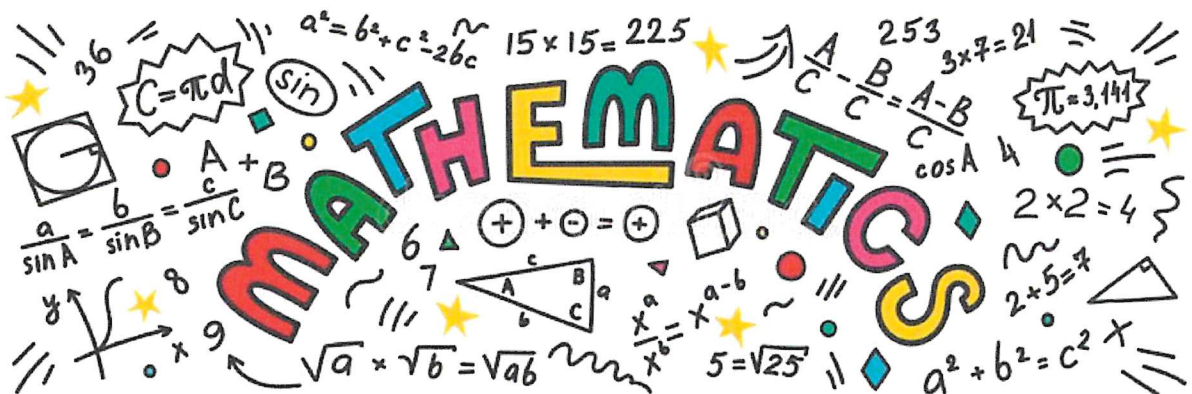


Maths

Level Three


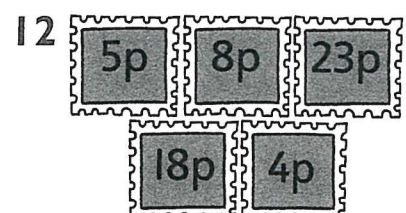
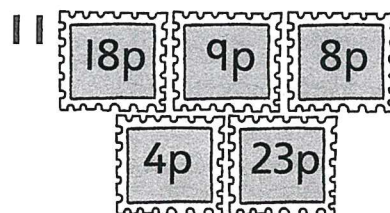
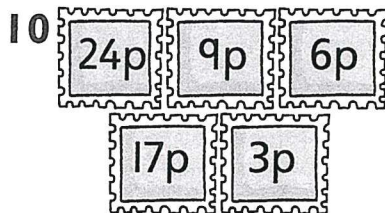
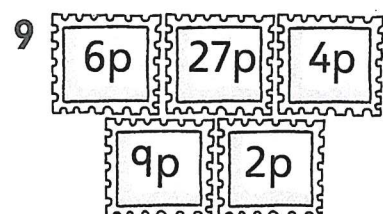
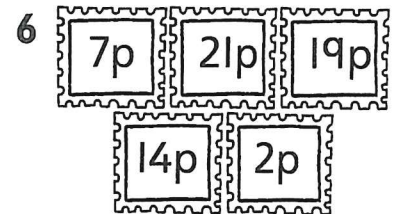
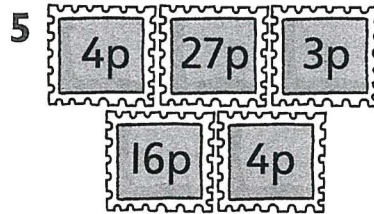

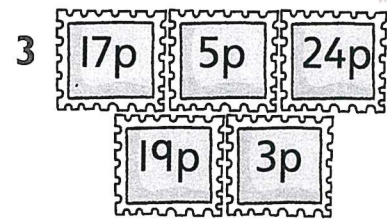



Task Two



Adding several numbers

Find the total cost of each set of stamps.

$$1. 22p + 8p + 3p + 7p + 9p = 49p$$



13 You are in charge of the Post Office! You sell stamps with five different values, e.g. 1p, 2p, 5p, 10p, 20p.

Use as few of your stamps as possible to make each total from questions 1 to 12.



I can add more than two numbers and find the total

Addition and subtraction facts

Use the number square to copy and complete the subtractions.

1. $50 - 18 = 32$



1 $50 - \square = 32$

2 $70 - \square = 52$

3 $67 - \square = 24$

4 $53 - \square = 29$

5 $28 = 74 - \square$

6 $45 = 78 - \square$

7 $51 = 96 - \square$

8 $62 = 91 - \square$

9 $74 = 99 - \square$



10 $18 = 46 - \square$

11 $14 = 78 - \square$

12 $75 = 101 - \square$

91	92	93	94	95	96	97	98	99	100
81	82	83	84	85	86	87	88	89	90
71	72	73	74	75	76	77	78	79	80
61	62	63	64	65	66	67	68	69	70
51	52	53	54	55	56	57	58	59	60
41	42	43	44	45	46	47	48	49	50
31	32	33	34	35	36	37	38	39	40
21	22	23	24	25	26	27	28	29	30
11	12	13	14	15	16	17	18	19	20
1	2	3	4	5	6	7	8	9	10

- 13 James has 74 marbles in a box. His brother Callum takes some out. 58 marbles are left in the box. How many marbles did Callum take?



- 14 Stuart has 56 books on his bookshelf. He gives some books to Lorna. Stuart has 28 books left. How many books did he give to Lorna?


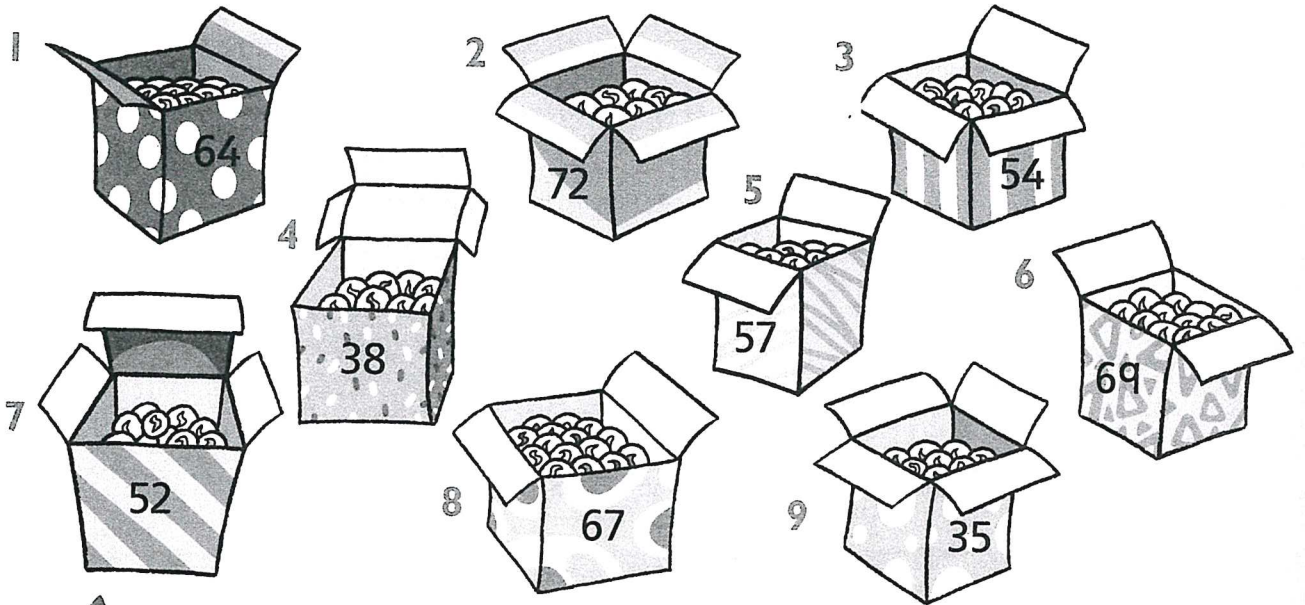


I can subtract using a 100-square to help me

Number pairs to 100


Each box held 100 marbles.
How many have been lost?

$$1. 100 - 64 = 36$$




Can you find two 2-digit numbers that add to 100 and whose four digits do not add to 19? What is the rule for those that do not add to 19?

10 Sunil has 100 conkers. He gives 34 to his younger sister. How many does he have left?



11 Mrs Sums has 100 stickers. She uses 27 in an assembly. How many does she have left?

12 Tom pays 36p for his ice-cream, using a £1 coin. How much change does he have? Suppose he buys two ice-creams?



13 There are 100 pens in a box. 47 are red and the rest are blue. How many are blue?



English
Level Three
Task Two





Punctuation

Practising direct speech



Remember that the comma goes inside the speech marks, not outside them!

A Copy these sentences, adding the speech marks and other missing punctuation.

- 1 *That is a truly amazing sight said Mum*
- 2 *It certainly is replied Uncle Colin and it is incredible to think how far away some of the stars are*
- 3 *William added Just think the light from the stars has taken thousands of years to reach Earth*
- 4 *Is that true asked Jessica*
- 5 *It certainly is replied Uncle Colin though it's difficult to imagine*

B Copy this paragraph, adding all the missing punctuation. Don't forget to begin a new line when a new person starts to speak.

Many of the stars are bigger than the Sun said Kelly Do they all have planets like our Earth asked Sam Yes replied Jessica but you can't see them from this distance So are there people like us on some of those planets asked Sam There could be said Jessica but no one can be sure Wouldn't it be funny if they were doing the same as us Maybe they are looking up and wondering if there could be people like them living on the planet called Earth laughed Kelly

