


Maths

Level Two

Task Three



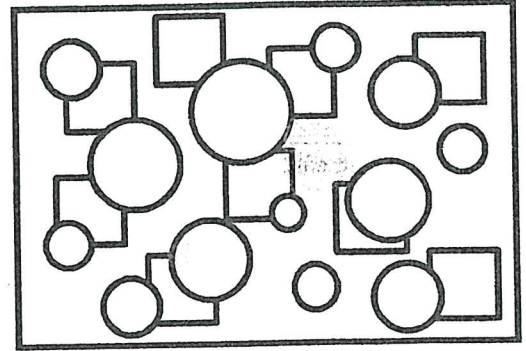
Name: _____

Date: _____

Math Challenge Take Away 2q

Why did the boy throw the clock out the window? To see time fly!

Complete the Activity.



①
$$\begin{array}{r} 16 \\ - 7 \\ \hline \end{array}$$

②
$$\begin{array}{r} 14 \\ - 7 \\ \hline \end{array}$$

③
$$\begin{array}{r} 17 \\ - 7 \\ \hline \end{array}$$

④
$$\begin{array}{r} 12 \\ - 6 \\ \hline \end{array}$$

⑤
$$\begin{array}{r} 6 \\ - 6 \\ \hline \end{array}$$

⑥
$$\begin{array}{r} 12 \\ - 7 \\ \hline \end{array}$$

⑦
$$\begin{array}{r} 15 \\ - 7 \\ \hline \end{array}$$

⑧
$$\begin{array}{r} 18 \\ - 6 \\ \hline \end{array}$$

⑨
$$\begin{array}{r} 11 \\ - 7 \\ \hline \end{array}$$

⑩
$$\begin{array}{r} 18 \\ - 7 \\ \hline \end{array}$$

⑪
$$\begin{array}{r} 19 \\ - 6 \\ \hline \end{array}$$

⑫
$$\begin{array}{r} 14 \\ - 6 \\ \hline \end{array}$$

⑬
$$\begin{array}{r} 13 \\ - 6 \\ \hline \end{array}$$

⑭
$$\begin{array}{r} 13 \\ - 7 \\ \hline \end{array}$$

⑮
$$\begin{array}{r} 17 \\ - 6 \\ \hline \end{array}$$

⑯
$$\begin{array}{r} 20 \\ - 7 \\ \hline \end{array}$$

⑰
$$\begin{array}{r} 16 \\ - 6 \\ \hline \end{array}$$

⑱
$$\begin{array}{r} 10 \\ - 6 \\ \hline \end{array}$$

⑲
$$\begin{array}{r} 9 \\ - 6 \\ \hline \end{array}$$

⑳
$$\begin{array}{r} 11 \\ - 6 \\ \hline \end{array}$$


Name: _____

Date: _____

Math Challenge Take Away 2a

What goes up when the rain comes down? An umbrella.

Complete the Activity.



①
$$\begin{array}{r} 7 \\ - 3 \\ \hline \end{array}$$

②
$$\begin{array}{r} 6 \\ - 6 \\ \hline \end{array}$$

③
$$\begin{array}{r} 13 \\ - 5 \\ \hline \end{array}$$

④
$$\begin{array}{r} 9 \\ - 4 \\ \hline \end{array}$$

⑤
$$\begin{array}{r} 13 \\ - 4 \\ \hline \end{array}$$

⑥
$$\begin{array}{r} 12 \\ - 4 \\ \hline \end{array}$$

⑦
$$\begin{array}{r} 13 \\ - 3 \\ \hline \end{array}$$

⑧
$$\begin{array}{r} 6 \\ - 5 \\ \hline \end{array}$$

⑨
$$\begin{array}{r} 12 \\ - 3 \\ \hline \end{array}$$

⑩
$$\begin{array}{r} 14 \\ - 5 \\ \hline \end{array}$$

⑪
$$\begin{array}{r} 9 \\ - 5 \\ \hline \end{array}$$

⑫
$$\begin{array}{r} 11 \\ - 3 \\ \hline \end{array}$$

⑬
$$\begin{array}{r} 7 \\ - 6 \\ \hline \end{array}$$

⑭
$$\begin{array}{r} 12 \\ - 6 \\ \hline \end{array}$$

⑮
$$\begin{array}{r} 12 \\ - 5 \\ \hline \end{array}$$

⑯
$$\begin{array}{r} 10 \\ - 3 \\ \hline \end{array}$$

⑰
$$\begin{array}{r} 10 \\ - 6 \\ \hline \end{array}$$

⑱
$$\begin{array}{r} 7 \\ - 4 \\ \hline \end{array}$$

⑲
$$\begin{array}{r} 8 \\ - 3 \\ \hline \end{array}$$

⑳
$$\begin{array}{r} 14 \\ - 6 \\ \hline \end{array}$$


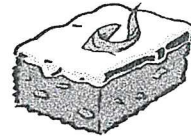
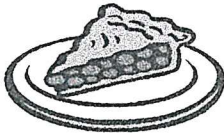





Addition – finish at home L

Name: _____ Class: _____

1) $\begin{array}{r} 24 \\ + 15 \\ \hline \end{array}$	2) $\begin{array}{r} 32 \\ + 27 \\ \hline \end{array}$	3) $\begin{array}{r} 34 \\ + 42 \\ \hline \end{array}$	4) $\begin{array}{r} 44 \\ + 35 \\ \hline \end{array}$
5) $\begin{array}{r} 52 \\ + 16 \\ \hline \end{array}$	6) $\begin{array}{r} 43 \\ + 54 \\ \hline \end{array}$	7) $\begin{array}{r} 72 \\ + 26 \\ \hline \end{array}$	8) $\begin{array}{r} 88 \\ + 11 \\ \hline \end{array}$
9) $\begin{array}{r} 62 \\ + 25 \\ \hline \end{array}$	10) $\begin{array}{r} 42 \\ + 53 \\ \hline \end{array}$	11) $\begin{array}{r} 63 \\ + 22 \\ \hline \end{array}$	12) $\begin{array}{r} 37 \\ + 62 \\ \hline \end{array}$
13) $\begin{array}{r} 82 \\ + 17 \\ \hline \end{array}$	14) $\begin{array}{r} 45 \\ + 44 \\ \hline \end{array}$	15) $\begin{array}{r} 53 \\ + 23 \\ \hline \end{array}$	16) $\begin{array}{r} 54 \\ + 35 \\ \hline \end{array}$
17) $\begin{array}{r} 21 \\ + 17 \\ \hline \end{array}$	18) $\begin{array}{r} 32 \\ + 16 \\ \hline \end{array}$	19) $\begin{array}{r} 41 \\ + 18 \\ \hline \end{array}$	20) $\begin{array}{r} 54 \\ + 14 \\ \hline \end{array}$
21) $\begin{array}{r} 42 \\ + 16 \\ \hline \end{array}$	22) $\begin{array}{r} 24 \\ + 12 \\ \hline \end{array}$	23) $\begin{array}{r} 73 \\ + 14 \\ \hline \end{array}$	24) $\begin{array}{r} 81 \\ + 13 \\ \hline \end{array}$
25) $\begin{array}{r} 64 \\ + 25 \\ \hline \end{array}$	26) $\begin{array}{r} 54 \\ + 23 \\ \hline \end{array}$	27) $\begin{array}{r} 17 \\ + 42 \\ \hline \end{array}$	28) $\begin{array}{r} 62 \\ + 25 \\ \hline \end{array}$

Laura owns a café. Work out how many of each kind of cake are left when she sells some.




<p>1. She has 14 She sells 6. How many are left?</p> 	<p>2. She has 12 She sells 5. How many are left?</p> 
<p>3. She has 14 She sells 6. How many are left?</p> 	<p>4. She has 18 She sells 9. How many are left?</p> 
<p>5. She has 13 She sells 4. How many are left?</p> 	<p>6. She has 17 She sells 9. How many are left?</p> 
<p>7. She has 11 She sells 3 How many are left?</p> 	<p>8. She has 12 She sells 9 How many are left?</p> 

English

Level Two

Task Three



UNIT
3

Little Red Riding Hood

Little Red Riding Hood and her mother live near a big, dark forest.

Her name comes from a bright red cloak with a hood that her granny made her.

'Please take this food to your granny. She's unwell in bed,' says her mother. 'Go through the forest but don't talk to any strangers you meet on the way.'

Little Red Riding Hood waves goodbye.

She walks into the forest with her basket. She doesn't see the Big Black Wolf watching her from behind a tree.

Suddenly the Wolf is on the path.

'Where are you going?' he asks.

'I'm taking this food to Granny,' says Red Riding Hood, feeling very scared.

Heather Amery



I Write

Copy and finish the sentences.

1 Granny made Little Red Riding Hood's _____.

basket cloak cake

2 Little Red Riding Hood's granny felt _____.

unwell happy tired

3 Little Red Riding Hood walked through the _____.

field village forest

4 Little Red Riding Hood was scared of the _____.

forest wolf dark

5 **Adjectives** are describing words.

Copy the adjectives used to describe these nouns.

a the forest

b the cloak

c the wolf

6 You have now read the start of two Little Red Riding Hood stories.

a List what is different about the two stories.

b List what is the same about the two stories.

7 Which story do you prefer?

Write a sentence to say why.



Write