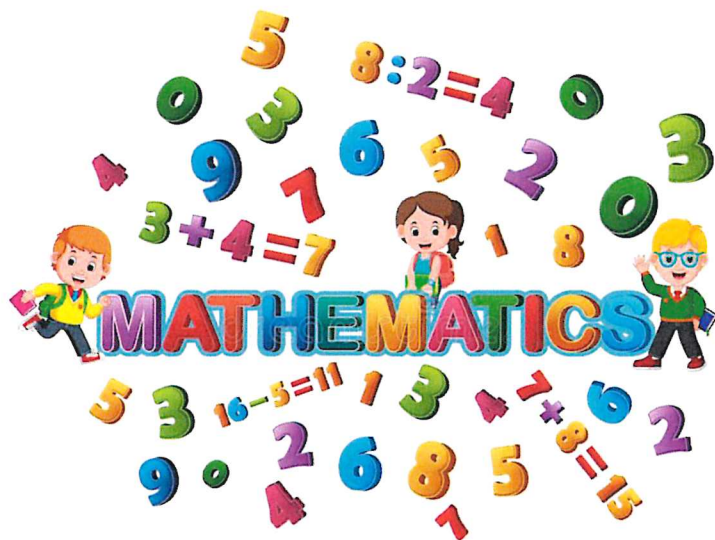


Maths

Level One


Task Three



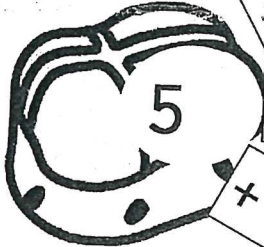
Hot Cross Buns Worksheet 1

Date

Add on from the number on each bun to find the answers. Try it without a number line

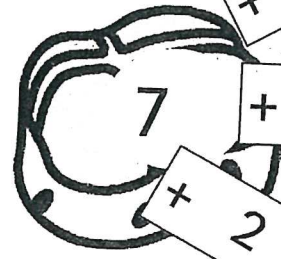


$+ 1 = \square$



$+ 3 = \square$

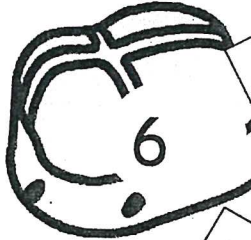
$+ 2 = \square$



$+ 1 = \square$

$+ 3 = \square$

$+ 2 = \square$



$+ 1 = \square$

$+ 3 = \square$

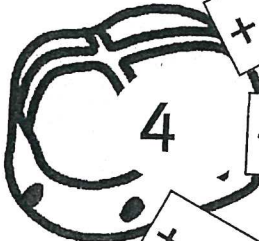
$+ 2 = \square$



$+ 1 = \square$

$+ 3 = \square$

$+ 2 = \square$



$+ 1 = \square$

$+ 3 = \square$

$+ 2 = \square$



$+ 1 = \square$


$+ 3 = \square$

$+ 2 = \square$

Hot Cross Buns Worksheet 2

Date

Add on from the number on each bun to find the answers. Use a number square to help you.



$$+ 3 = \square$$

$+ 5 = \square$

$+ 4 = \square$

$+ 3 = \square$

$+ 5 = \square$

$+ 4 = \square$

$+ 3 = \square$

$+ 5 = \square$

$+ 4 = \square$

$+ 3 = \square$

$+ 5 = \square$

$+ 4 = \square$

$+ 3 = \square$


$+ 5 = \square$

$+ 4 = \square$

$+ 3 = \square$

$+ 5 = \square$

$+ 4 = \square$



Subtraction

A. $3 - 2 =$ _____

B. $7 - 4 =$ _____

C. $10 - 6 =$ _____

D. $13 - 5 =$ _____

E. $11 - 8 =$ _____

F. $18 - 7 =$ _____

G. $14 - 3 =$ _____

H. $19 + 12 =$ _____

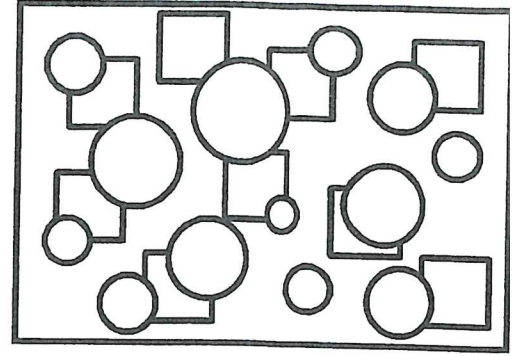
Name: _____

Date: _____

Math Challenge Take Away 2f

What time is it when an elephant sits on a fence? Time to get a new fence.

Complete the Activity.



①
$$\begin{array}{r} 11 \\ - 3 \\ \hline \\ \hline \end{array}$$

②
$$\begin{array}{r} 6 \\ - 5 \\ \hline \\ \hline \end{array}$$

③
$$\begin{array}{r} 12 \\ - 3 \\ \hline \\ \hline \end{array}$$

④
$$\begin{array}{r} 6 \\ - 6 \\ \hline \\ \hline \end{array}$$

⑤
$$\begin{array}{r} 15 \\ - 3 \\ \hline \\ \hline \end{array}$$

⑥
$$\begin{array}{r} 9 \\ - 3 \\ \hline \\ \hline \end{array}$$

⑦
$$\begin{array}{r} 7 \\ - 4 \\ \hline \\ \hline \end{array}$$

⑧
$$\begin{array}{r} 6 \\ - 3 \\ \hline \\ \hline \end{array}$$

⑨
$$\begin{array}{r} 12 \\ - 7 \\ \hline \\ \hline \end{array}$$

⑩
$$\begin{array}{r} 8 \\ - 3 \\ \hline \\ \hline \end{array}$$

⑪
$$\begin{array}{r} 10 \\ - 5 \\ \hline \\ \hline \end{array}$$

⑫
$$\begin{array}{r} 14 \\ - 7 \\ \hline \\ \hline \end{array}$$

⑬
$$\begin{array}{r} 8 \\ - 5 \\ \hline \\ \hline \end{array}$$

⑭
$$\begin{array}{r} 11 \\ - 6 \\ \hline \\ \hline \end{array}$$

⑮
$$\begin{array}{r} 7 \\ - 5 \\ \hline \\ \hline \end{array}$$

⑯
$$\begin{array}{r} 11 \\ - 5 \\ \hline \\ \hline \end{array}$$

⑰
$$\begin{array}{r} 10 \\ - 3 \\ \hline \\ \hline \end{array}$$

⑱
$$\begin{array}{r} 14 \\ - 4 \\ \hline \\ \hline \end{array}$$

⑲
$$\begin{array}{r} 13 \\ - 6 \\ \hline \\ \hline \end{array}$$

⑳
$$\begin{array}{r} 13 \\ - 5 \\ \hline \\ \hline \end{array}$$

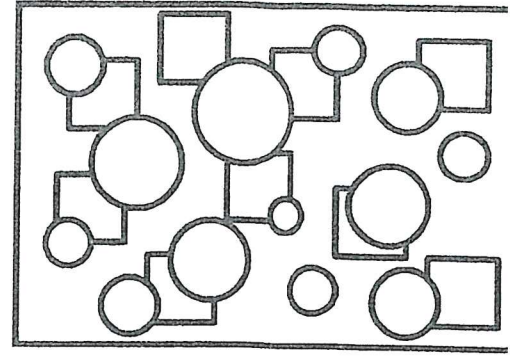
Name: _____

Date: _____

Math Challenge Take Away 2a

What goes up when the rain comes down? An umbrella.

Complete the Activity.



$$\begin{array}{r} \textcircled{1} \quad 7 \\ - 3 \\ \hline \end{array}$$

$$\begin{array}{r} \textcircled{2} \quad 6 \\ - 6 \\ \hline \end{array}$$

$$\begin{array}{r} \textcircled{3} \quad 13 \\ - 5 \\ \hline \end{array}$$

$$\begin{array}{r} \textcircled{4} \quad 9 \\ - 4 \\ \hline \end{array}$$

$$\begin{array}{r} \textcircled{5} \quad 13 \\ - 4 \\ \hline \end{array}$$

$$\begin{array}{r} \textcircled{6} \quad 12 \\ - 4 \\ \hline \end{array}$$

$$\begin{array}{r} \textcircled{7} \quad 13 \\ - 3 \\ \hline \end{array}$$

$$\begin{array}{r} \textcircled{8} \quad 6 \\ - 5 \\ \hline \end{array}$$

$$\begin{array}{r} \textcircled{9} \quad 12 \\ - 3 \\ \hline \end{array}$$

$$\begin{array}{r} \textcircled{10} \quad 14 \\ - 5 \\ \hline \end{array}$$

$$\begin{array}{r} \textcircled{11} \quad 9 \\ - 5 \\ \hline \end{array}$$

$$\begin{array}{r} \textcircled{12} \quad 11 \\ - 3 \\ \hline \end{array}$$

$$\begin{array}{r} \textcircled{13} \quad 7 \\ - 6 \\ \hline \end{array}$$

$$\begin{array}{r} \textcircled{14} \quad 12 \\ - 6 \\ \hline \end{array}$$

$$\begin{array}{r} \textcircled{15} \quad 12 \\ - 5 \\ \hline \end{array}$$

$$\begin{array}{r} \textcircled{16} \quad 10 \\ - 3 \\ \hline \end{array}$$

$$\begin{array}{r} \textcircled{17} \quad 10 \\ - 6 \\ \hline \end{array}$$

$$\begin{array}{r} \textcircled{18} \quad 7 \\ - 4 \\ \hline \end{array}$$

$$\begin{array}{r} \textcircled{19} \quad 8 \\ - 3 \\ \hline \end{array}$$

$$\begin{array}{r} \textcircled{20} \quad 14 \\ - 6 \\ \hline \end{array}$$

1 to 200 Number Square

1	2	3	4	5	6	7	8	9	10
11	12	13	14	15	16	17	18	19	20
21	22	23	24	25	26	27	28	29	30
31	32	33	34	35	36	37	38	39	40
41	42	43	44	45	46	47	48	49	50
51	52	53	54	55	56	57	58	59	60
61	62	63	64	65	66	67	68	69	70
71	72	73	74	75	76	77	78	79	80
81	82	83	84	85	86	87	88	89	90
91	92	93	94	95	96	97	98	99	100
101	102	103	104	105	106	107	108	109	110
111	112	113	114	115	116	117	118	119	120
121	122	123	124	125	126	127	128	129	130
131	132	133	134	135	136	137	138	139	140
141	142	143	144	145	146	147	148	149	150
151	152	153	154	155	156	157	158	159	160
161	162	163	164	165	166	167	168	169	170
171	172	173	174	175	176	177	178	179	180
181	182	183	184	185	186	187	188	189	190
191	192	193	194	195	196	197	198	199	200


English

Level One

Task Three



Farm Fun



The café sells sandwiches, drinks and sweets.

Playground

Cows

Ponies

Goats

Sheep

Hens

You can buy toys and small gifts from the shop.

Farm Walk

Car park

The walk will take one hour.

Teach

- 1 What can you buy from the shop?
- 2 Where can you buy sweets?
- 3 What animals can you feed at Pets' Corner?
- 4 How many kinds of animals do you see on the Farm Walk?



- 5 Find labels on the map that rhyme with each of these words.
boats
sleep
pens

Look at the Farm Walk on the map.

- 6 How long do you think it would take?
- 7 Which areas do you think children would enjoy the most?



- 8 Would you like to go to this farm?
What would you like to do at the farm?