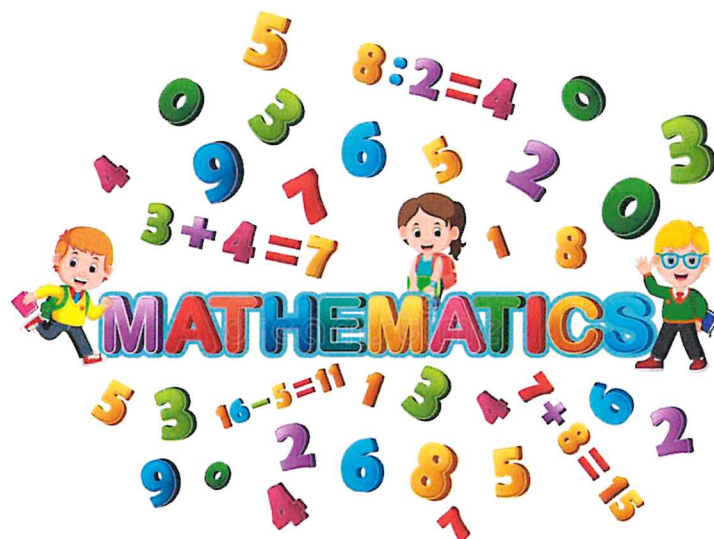


# Maths

## Level One

### Task Two



## Adding with Some Regrouping (B)

Find each sum.

$$\begin{array}{r} 7 \\ + 9 \\ \hline \end{array}$$

$$\begin{array}{r} 1 \\ + 5 \\ \hline \end{array}$$

$$\begin{array}{r} 4 \\ + 5 \\ \hline \end{array}$$

$$\begin{array}{r} 3 \\ + 4 \\ \hline \end{array}$$

$$\begin{array}{r} 4 \\ + 9 \\ \hline \end{array}$$

$$\begin{array}{r} 3 \\ + 2 \\ \hline \end{array}$$

$$\begin{array}{r} 3 \\ + 9 \\ \hline \end{array}$$

$$\begin{array}{r} 2 \\ + 6 \\ \hline \end{array}$$

$$\begin{array}{r} 8 \\ + 7 \\ \hline \end{array}$$

$$\begin{array}{r} 3 \\ + 3 \\ \hline \end{array}$$

$$\begin{array}{r} 6 \\ + 6 \\ \hline \end{array}$$

$$\begin{array}{r} 6 \\ + 7 \\ \hline \end{array}$$

$$\begin{array}{r} 8 \\ + 3 \\ \hline \end{array}$$

$$\begin{array}{r} 7 \\ + 2 \\ \hline \end{array}$$

$$\begin{array}{r} 6 \\ + 4 \\ \hline \end{array}$$

$$\begin{array}{r} 5 \\ + 4 \\ \hline \end{array}$$

$$\begin{array}{r} 5 \\ + 8 \\ \hline \end{array}$$

$$\begin{array}{r} 8 \\ + 4 \\ \hline \end{array}$$

$$\begin{array}{r} 1 \\ + 2 \\ \hline \end{array}$$

$$\begin{array}{r} 1 \\ + 8 \\ \hline \end{array}$$

$$\begin{array}{r} 1 \\ + 8 \\ \hline \end{array}$$

$$\begin{array}{r} 8 \\ + 9 \\ \hline \end{array}$$

$$\begin{array}{r} 3 \\ + 8 \\ \hline \end{array}$$

$$\begin{array}{r} 1 \\ + 1 \\ \hline \end{array}$$

$$\begin{array}{r} 2 \\ + 1 \\ \hline \end{array}$$

# Star Number Bonds to 10

Write the missing number to make each star equal to 10.

6 +

8 +

10 +

2 +

5 +

9 +

1 +

3 +

7 +





4 +

0 +








# Missing Numbers

Write down each missing number.



# Missing Numbers

Write down each missing number.






## Add one more

Here are 3 ice creams.

Draw 1 more.


How many are there now?



Here are 4 sweets.

Draw 1 more.


How many are there now?



Here are 5 buns.

Draw 1 more.

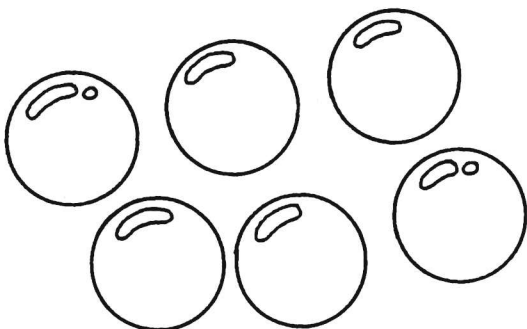
How many are there now?



Here are 6 chocolate buttons.

Draw 1 more.

How many are there now?



# English

## Level One

### Task Two





UNIT  
2

Adam's Visit



Adam looks at the cows.



Adam eats his lunch.



Write



Copy the right answers.

- 1 Where does Adam sit to eat his sandwiches?

Adam sits outside the café.

Adam sits inside the café.

- 2 Which animals does Adam feed?

Adam feeds the horse.

Adam feeds the goats.

- 3 What does Adam do at the playground?

Adam plays on the slide.

Adam plays on the swings.

- 4 Naming words tell us the names of things.

Copy the naming words in these sentences.

Adam looks at the cows.

Adam eats his lunch.

- 5 Do you think Adam enjoyed his day out?

Write a sentence saying why.

- 6 Two pictures need a sentence each.

Write a sentence for each picture.

Write what Adam is doing.



Don't forget to use a capital letter and a full stop in your sentences!



Write