















Progress test
Entry Level 1 Time
STAGE 1 (Set A)



Name	Date	Score	/10
1) What number is the hour hand pointing to?			
	<input type="text"/>		
2) What number is the hour hand pointing to?			
	<input type="text"/>		
3) What number is the hour hand pointing to?			
	<input type="text"/>		
4) What number is the hour hand pointing to?			
	<input type="text"/>		
5) What number is the hour hand pointing to?			
	<input type="text"/>		
6) What number is the hour hand pointing to?			
	<input type="text"/>		
7) What number is the hour hand pointing to?			
	<input type="text"/>		
8) What number is the hour hand pointing to?			
	<input type="text"/>		
9) What number is the hour hand pointing to?			
	<input type="text"/>		
10) What number is the hour hand pointing to?			
	<input type="text"/>		



Progress test
Entry Level 1 Time
STAGE 2 (Set A)



Name

Date


Score

/10


1) What time does the clock show?



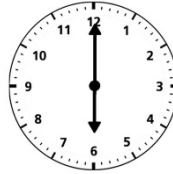
2) What time does the clock show?



3) What time does the clock show?



4) What time does the clock show?



5) What time does the clock show?




6) What time does the clock show?



7) What time does the clock show?




8) What time does the clock show?



9) What time does the clock show?




10) What time does the clock show?






Progress test
Entry Level 1 Time
STAGE 3 (Set A)



Name	Date	Score	/10
1) Which time is later in the day? 5 a.m. or 5 p.m. <input type="text"/>	2) Which time is earlier in the day? 10 a.m. or 10 p.m. <input type="text"/>		
3) Which time is later in the day? 2 a.m. or 2 p.m. <input type="text"/>	4) Which time is earlier in the day? 1 a.m. or 1 p.m. <input type="text"/>		
5) Which time is earlier in the day? 4 a.m. or 4 p.m. <input type="text"/>	6) Which time is earlier in the day? 7 a.m. or 7 p.m. <input type="text"/>		
7) Which time is earlier in the day? 3 a.m. or 3 p.m. <input type="text"/>	8) Which time is later in the day? 8 a.m. or 8 p.m. <input type="text"/>		
9) Which time is later in the day? 11 a.m. or 11 p.m. <input type="text"/>	10) Which time is later in the day? 6 a.m. or 6 p.m. <input type="text"/>		




Progress test
Entry Level 1 Time
STAGE 4 (Set A)



Name	Date	Score	/10
1) Which time is earlier in the day? 11 a.m. or 7 p.m.			
<input type="text"/>			
2) Which time is earlier in the day? 2 a.m. or 1 p.m.			
<input type="text"/>			
3) Which time is later in the day? 8 a.m. or 3 p.m.			
<input type="text"/>			
4) Which time is later in the day? 4 a.m. or 9 p.m.			
<input type="text"/>			
5) Which time is earlier in the day? 10 a.m. or 5 p.m.			
<input type="text"/>			
6) Which time is later in the day? 1 a.m. or 4 p.m.			
<input type="text"/>			
7) Which time is earlier in the day? 3 a.m. or 10 p.m.			
<input type="text"/>			
8) Which time is later in the day? 6 a.m. or 8 p.m.			
<input type="text"/>			
9) Which time is later in the day? 5 a.m. or 6 p.m.			
<input type="text"/>			
10) Which time is earlier in the day? 7 a.m. or 2 p.m.			
<input type="text"/>			




Progress test
Entry Level 1 Time
STAGE 5 (Set A)



Name	Date	Score	/10
1) Which time is earlier in the day? 3 a.m. or midday			
<input type="text"/>			
2) Which time is later in the day? midday or 1 p.m.			
<input type="text"/>			
3) Which time is earlier in the day? midday or 10 a.m.			
<input type="text"/>			
4) Which time is later in the day? 8 a.m. or 4 p.m.			
<input type="text"/>			
5) Which time is earlier in the day? 6 p.m. or 2 a.m.			
<input type="text"/>			
6) Which time is later in the day? 8 p.m. or midday			
<input type="text"/>			
7) Which time is earlier in the day? midday or 4 a.m.			
<input type="text"/>			
8) Which time is later in the day? 10 p.m. or 7 a.m.			
<input type="text"/>			
9) Which time is earlier in the day? 9 a.m. or 11 p.m.			
<input type="text"/>			
10) Which time is later in the day? 5 p.m. or midday			
<input type="text"/>			




Progress test
Entry Level 1 Time
STAGE 6 (Set A)













Name	Date	Score	/10
1) Which time is earlier in the day? noon or 8 a.m.			
<input type="text"/>			
2) Which time is later in the day? 4 p.m. or midday			
<input type="text"/>			
3) Which time is earlier in the day? 5 a.m. or noon			
<input type="text"/>			
4) Which time is later in the day? 2 p.m. or 6 p.m.			
<input type="text"/>			
5) Which time is earlier in the day? midday or 2 a.m.			
<input type="text"/>			
6) Which time is later in the day? 9 a.m. or midday			
<input type="text"/>			
7) Which time is earlier in the day? midday or 3 p.m.			
<input type="text"/>			
8) Which time is later in the day? noon or 7 p.m.			
<input type="text"/>			
9) Which time is earlier in the day? 11 a.m. or noon			
<input type="text"/>			
10) Which time is later in the day? 1 p.m. or 10 a.m.			
<input type="text"/>			




Progress test
Entry Level 1 Time
STAGE 7 (Set A)













Name	Date	Score	/10
1) This clock shows 5 o'clock. What time is 1 hour earlier than 5 o'clock?  <input type="text"/>	2) This clock shows 3 o'clock. What time is 1 hour later than 3 o'clock?  <input type="text"/>		
3) This clock shows 7 o'clock. What time is 1 hour earlier than 7 o'clock?  <input type="text"/>	4) This clock shows 6 o'clock. What time is 1 hour later than 6 o'clock?  <input type="text"/>		
5) This clock shows 12 o'clock. What time is 1 hour earlier than 12 o'clock?  <input type="text"/>	6) This clock shows 11 o'clock. What time is 1 hour later than 11 o'clock?  <input type="text"/>		
7) This clock shows 1 o'clock. What time is 1 hour earlier than 1 o'clock?  <input type="text"/>	8) This clock shows 8 o'clock. What time is 1 hour later than 8 o'clock?  <input type="text"/>		
9) This clock shows 10 o'clock. What time is 1 hour earlier than 10 o'clock?  <input type="text"/>	10) This clock shows 9 o'clock. What time is 1 hour later than 9 o'clock?  <input type="text"/>		




Progress test
Entry Level 1 Time
STAGE 8 (Set A)













Name	Date	Score	/10
1) This clock shows 6 o'clock. What time is 1 hour before 6 o'clock?  <input type="text"/>	2) This clock shows 7 o'clock. What time is 1 hour after 7 o'clock?  <input type="text"/>		
3) This clock shows 3 o'clock. What time is 1 hour before 3 o'clock?  <input type="text"/>	4) This clock shows 11 o'clock. What time is 1 hour after 11 o'clock?  <input type="text"/>		
5) This clock shows 9 o'clock. What time is 1 hour before 9 o'clock?  <input type="text"/>	6) This clock shows 1 o'clock. What time is 1 hour after 1 o'clock?  <input type="text"/>		
7) This clock shows 2 o'clock. What time is 1 hour before 2 o'clock?  <input type="text"/>	8) This clock shows 5 o'clock. What time is 1 hour after 5 o'clock?  <input type="text"/>		
9) This clock shows 12 o'clock. What time is 1 hour before 12 o'clock?  <input type="text"/>	10) This clock shows 4 o'clock. What time is 1 hour after 4 o'clock?  <input type="text"/>		




Progress test
Entry Level 1 Time
STAGE 9 (Set A)













Name	Date	Score	/10
1) This clock shows 11 o'clock. What time is 1 hour earlier than 11 o'clock?  <input type="text"/>	2) This clock shows 2 o'clock. What time is 1 hour after 2 o'clock?  <input type="text"/>		
3) This clock shows 12 o'clock. What time is 1 hour before 12 o'clock?  <input type="text"/>	4) This clock shows 3 o'clock. What time is 1 hour later than 3 o'clock?  <input type="text"/>		
5) This clock shows 8 o'clock. What time is 1 hour after 8 o'clock?  <input type="text"/>	6) This clock shows 9 o'clock. What time is 1 hour earlier than 9 o'clock?  <input type="text"/>		
7) This clock shows 1 o'clock. What time is 1 hour earlier than 1 o'clock?  <input type="text"/>	8) This clock shows 5 o'clock. What time is 1 hour before 5 o'clock?  <input type="text"/>		
9) This clock shows 6 o'clock. What time is 1 hour before 6 o'clock?  <input type="text"/>	10) This clock shows 4 o'clock. What time is 1 hour later than 4 o'clock?  <input type="text"/>		



Progress test
Entry Level 1 Time
STAGE 10 (Set A)



Name	Date	Score	/10
1) What number is the minute hand pointing to?			
	<input type="text"/>		
2) What number is the hour hand pointing to?			
	<input type="text"/>		
3) What number is the hour hand pointing to?			
	<input type="text"/>		
4) What number is the minute hand pointing to?			
	<input type="text"/>		
5) What number is the minute hand pointing to?			
	<input type="text"/>		
6) What number is the minute hand pointing to?			
	<input type="text"/>		
7) What number is the hour hand pointing to?			
	<input type="text"/>		
8) What number is the minute hand pointing to?			
	<input type="text"/>		
9) What number is the hour hand pointing to?			
	<input type="text"/>		
10) What number is the hour hand pointing to?			
	<input type="text"/>		