


Maths

Level Two

Task Eleven



Statutory Multiplication Tables Check Practice

5

Name: _____ Score: _____

Time: _____ Previous Score: _____

1. $5 \times 10 =$ _____

2. $7 \times 11 =$ _____

3. $6 \times 2 =$ _____

4. $6 \times 6 =$ _____

5. $9 \times 11 =$ _____

6. $9 \times 5 =$ _____

7. $8 \times 2 =$ _____

8. $8 \times 3 =$ _____

9. $3 \times 10 =$ _____

10. $4 \times 5 =$ _____

11. $7 \times 7 =$ _____

12. $11 \times 5 =$ _____

13. $11 \times 11 =$ _____

14. $12 \times 11 =$ _____

15. $12 \times 9 =$ _____

16. $7 \times 12 =$ _____

17. $12 \times 6 =$ _____

18. $5 \times 3 =$ _____

19. $7 \times 3 =$ _____

20. $9 \times 9 =$ _____


21. $8 \times 9 =$ _____

22. $4 \times 11 =$ _____

23. $10 \times 11 =$ _____

24. $6 \times 3 =$ _____

25. $3 \times 11 =$ _____



Statutory Multiplication Tables Check Practice

6

Name: _____ Score: _____

Time: _____ Previous Score: _____

1. $6 \times 10 =$ _____

2. $3 \times 9 =$ _____

3. $7 \times 2 =$ _____

4. $5 \times 9 =$ _____

5. $4 \times 6 =$ _____

6. $8 \times 11 =$ _____

7. $9 \times 2 =$ _____

8. $9 \times 7 =$ _____

9. $7 \times 5 =$ _____

10. $8 \times 5 =$ _____

11. $6 \times 9 =$ _____

12. $8 \times 7 =$ _____

13. $7 \times 7 =$ _____

14. $7 \times 10 =$ _____

15. $4 \times 9 =$ _____

16. $5 \times 10 =$ _____

17. $12 \times 8 =$ _____

18. $8 \times 8 =$ _____

19. $3 \times 6 =$ _____

20. $2 \times 4 =$ _____

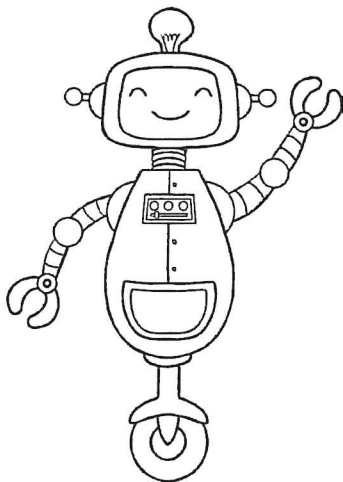
21. $12 \times 7 =$ _____

22. $2 \times 10 =$ _____

23. $4 \times 10 =$ _____

24. $9 \times 12 =$ _____

25. $3 \times 3 =$ _____



English

Level Two

Task Eleven



Spelling

'er', 'ir' and 'ur'

Remember, different groups of letters can sometimes make the same sound. The letters 'er', 'ir' and 'ur' sometimes sound the same. For example:

her bird turtle




A Copy the words below and underline the letters that make the same sound.

The first one has been done to help you.

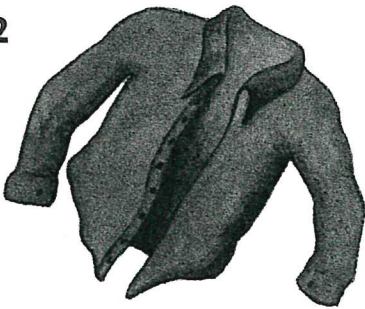
- | | | |
|--------|-------------|---------|
| 1 surf | <u>surf</u> | 2 birth |
| 3 germ | 4 dirt | 5 her |
| 6 curl | 7 first | 8 turn |

B Find a word in the wordsearch to match each picture below.


1



2



3




4



5



6



r	c	p	e	r	c	h
o	h	d	g	f	g	j
p	u	r	s	e	e	g
s	r	a	b	r	l	i
f	c	h	u	n	p	r
s	h	i	r	t	u	l

Writing sentences

Sentences



Remember,
? and ! have
full stops at
the bottom.

Remember, every **sentence** must begin with a **capital letter** and end with a **full stop**.

A Copy these sentences.

Put in the missing capital letters and full stops.

1 most reptiles lay eggs

2 turtles lay eggs in holes in the sand

B Copy these sentences.

Put in all the missing capital letters and punctuation marks.

1 james and lisa went to london zoo

2 did they see turtles at the zoo


Writing

Flow diagrams

We can put information into a **flow diagram** which shows the order in which things happen.

Carefully read this information about frogs' eggs.

Frogs' eggs are called frog spawn. Female frogs lay the frog spawn in water. The frog spawn hatches into tadpoles. In 14 to 16 weeks the tadpoles grow into frogs.



Use the information to draw a flow diagram.
You will need to draw three pictures and write a sentence to go with each.